


Symmetrical Patterns

Challenge Cards



Symmetrical Patterns


1. Which is the other half of this pattern?



A



B




C



D

Symmetrical Patterns

2. Which is the other half of this pattern?



A



B



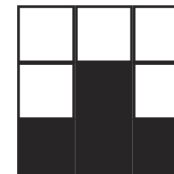

C




D

Symmetrical Patterns

3. Which is the other half of this pattern?




A



B



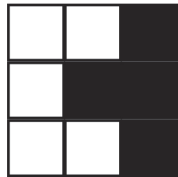

C




D

Symmetrical Patterns

4. Which is the other half of this pattern?




A



B





C




D

Symmetrical Patterns


5. Which is the other half of this pattern?




A



B




C



D

Symmetrical Patterns


6. Which is the other half of this pattern?




A



B





C




D

Symmetrical Patterns


7. Which is the other half of this pattern?



A



B




C




D

Symmetrical Patterns


8. Which is the other half of this pattern?




A



B



C



D

twinkl.co.uk

Symmetrical Patterns **Answers**

- 1. D
- 2. A
- 3. B
- 4. C
- 5. C
- 6. A
- 7. B
- 8. D