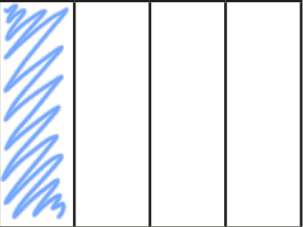

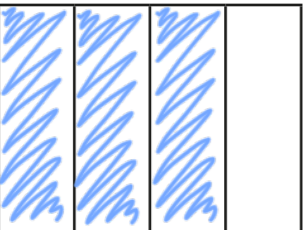
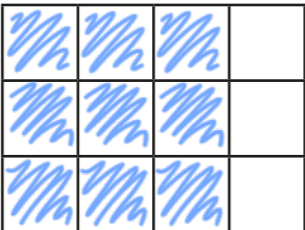


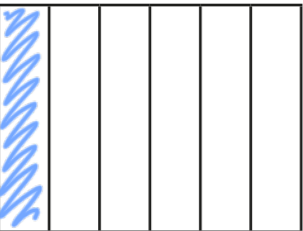
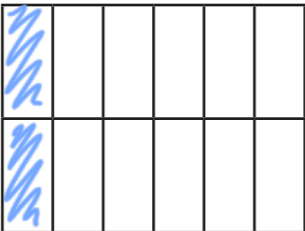
Equivalent fractions


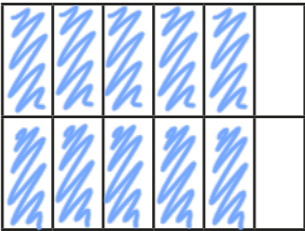


1 Shade the shapes to show the equivalent fractions.

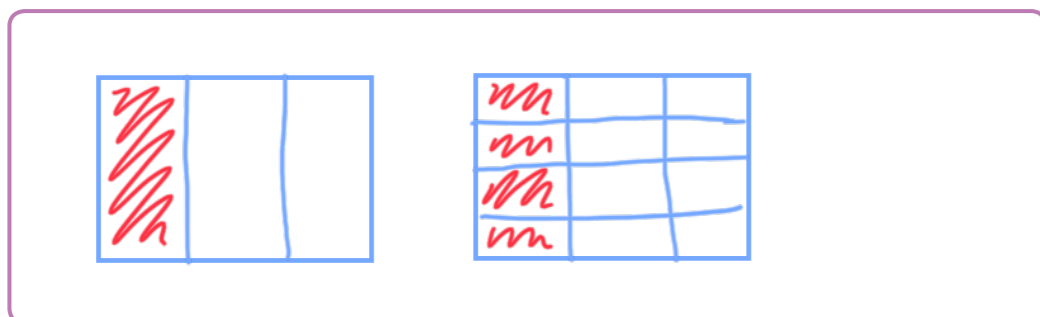
a)   $\frac{1}{4} = \frac{\boxed{3}}{\boxed{12}}$

b)   $\frac{3}{4} = \frac{\boxed{9}}{\boxed{12}}$

c)   $\frac{1}{6} = \frac{\boxed{2}}{\boxed{12}}$

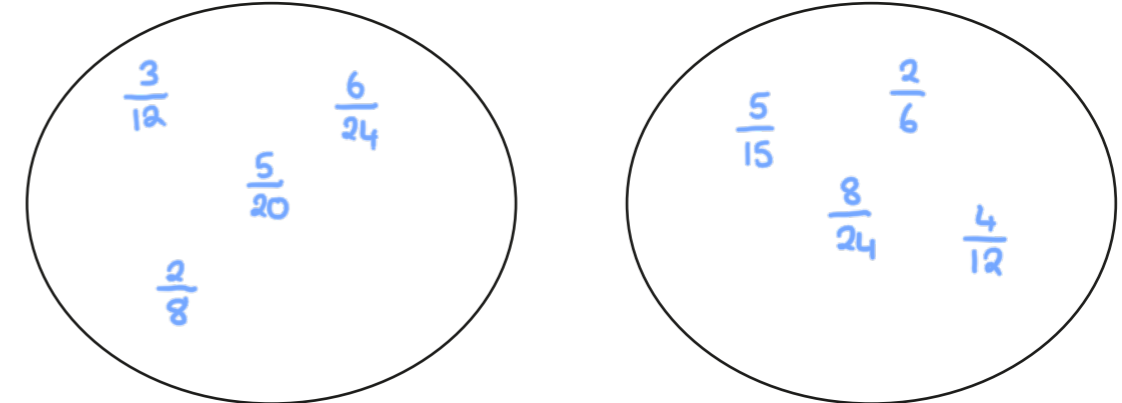
d)   $\frac{5}{6} = \frac{\boxed{10}}{\boxed{12}}$

2 Draw two rectangles to show that $\frac{1}{3} = \frac{4}{12}$



3 a) Sort the fractions into the groups.

Equivalent to $\frac{1}{4}$ Equivalent to $\frac{1}{3}$



$\frac{5}{15}$ $\frac{2}{6}$ $\frac{3}{12}$ $\frac{6}{24}$ $\frac{8}{24}$ $\frac{5}{20}$ $\frac{4}{12}$ $\frac{2}{8}$

b) Write one more fraction in each group.

4 Complete the equivalent fractions.

a) $\frac{1}{7} = \frac{\boxed{2}}{\boxed{14}}$

d) $\frac{3}{4} = \frac{6}{\boxed{8}}$

g) $\frac{2}{\boxed{3}} = \frac{10}{15}$

b) $\frac{5}{7} = \frac{\boxed{10}}{\boxed{14}}$

e) $\frac{3}{4} = \frac{12}{\boxed{16}}$

h) $\frac{2}{\boxed{5}} = \frac{10}{25}$

c) $\frac{7}{8} = \frac{14}{\boxed{16}}$

f) $\frac{3}{4} = \frac{\boxed{9}}{\boxed{12}}$

i) $\frac{2}{7} = \frac{10}{\boxed{35}}$

j) Describe the pattern in part g), h) and i) to a partner.



5 Find three ways to make the fractions equivalent.


e.g.

a) $\frac{1}{2} = \frac{7}{14}$ b) $\frac{7}{7} = \frac{14}{14}$ c) $\frac{1}{7} = \frac{2}{14}$

$\frac{1}{8} = \frac{7}{56}$ $\frac{7}{1} = \frac{14}{2}$ $\frac{5}{7} = \frac{10}{14}$

$\frac{1}{100} = \frac{7}{700}$ $\frac{7}{10} = \frac{14}{20}$ $\frac{21}{7} = \frac{42}{14}$

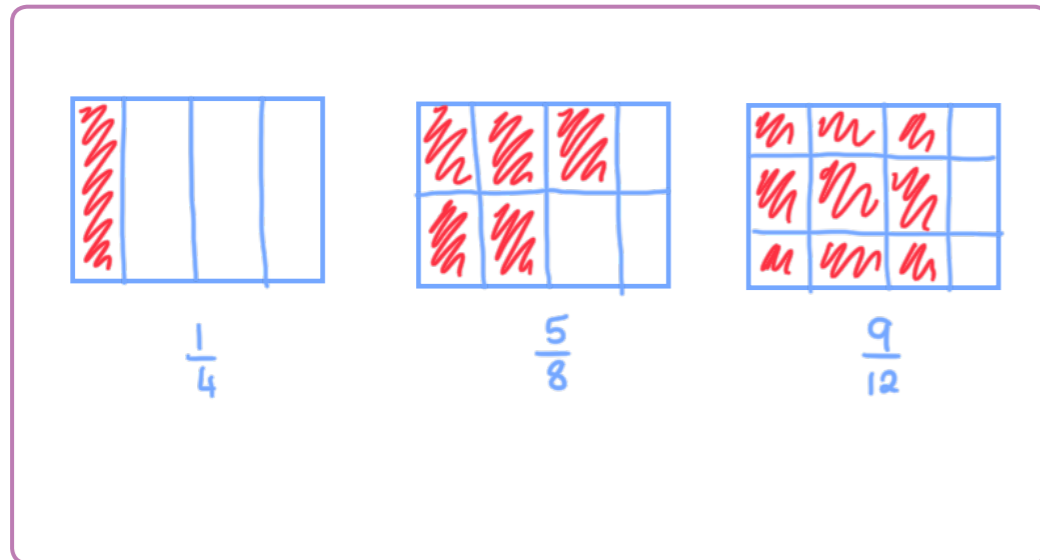
6 Ron is finding equivalent fractions to $\frac{1}{4}$



$\frac{1}{4}$ is equivalent to $\frac{5}{8}$
and $\frac{9}{12}$

Do you agree with Ron? No

Draw a diagram to support your answer.



Compare answers with a partner.

7 Here are some equivalent fractions.

Find the values of A, B and C.

$\frac{A}{9} = \frac{3}{B} = \frac{2}{18} = \frac{C}{90}$

A = 1 B = 27 C = 10

8 Here are three fraction cards.

All the fractions are equivalent.

$\frac{3}{A} = \frac{B}{14} = \frac{12}{C}$

A + B = 13

Work out the value of C.

C = 28

9 $\frac{1}{5} = \frac{3}{1 + \bullet}$

Find the value of \bullet

$\bullet = 14$