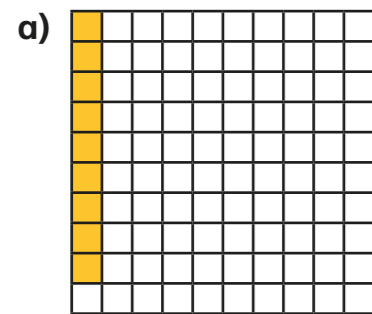


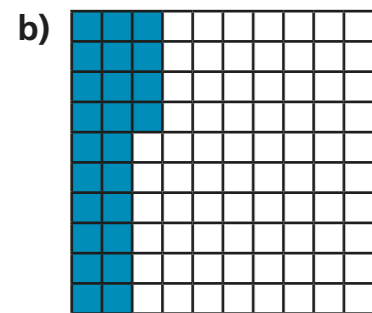
Understand percentages

1 Complete the sentence for each diagram.



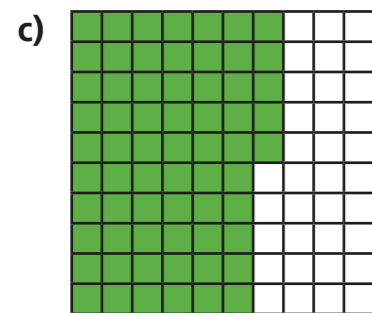
There are parts out of a hundred shaded.

This is %.



There are parts out of a hundred shaded.

This is %.



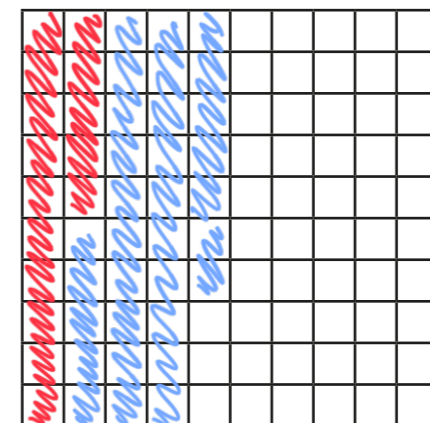
There are parts out of a hundred shaded.

This is %.

2 Complete the table.

Hundred square	Percentage
	15%
	63%
	82%

3 Shade 15% of the hundred square red.
Shade 32% of the hundred square blue.



What percentage of the hundred square is **not** shaded? %

4 a) Is 1% of this bar model shaded? No



Explain your reasoning.

It's split into 10 parts so each part is 10%

b) What percentage of each bar model is shaded?



30 %



70 %

5 Passengers are boarding a plane.

The plane has 100 seats.

a) 10% of the seats are already full.

How many passengers are already on the plane?

10

b) 15% of the seats have not been booked.

How many seats have been booked?

85


c) How many passengers still need to board the plane?

75

6 Dexter has £1 to spend.
He buys some stickers.



I got 35p change.



What percentage of his money did Dexter spend?

65 %

7 Aisha and Brett have been selling tickets for the school play.

There are 100 seats available.

- On Monday they sold 34% of the tickets.
- On Tuesday they sold 42 tickets.
- By the end of Wednesday, 95% of the tickets had been sold.

How many tickets did they sell on Wednesday?

On Wednesday they sold 19 tickets.

8 Shade 85% of this bar model.



Compare answers with a partner.